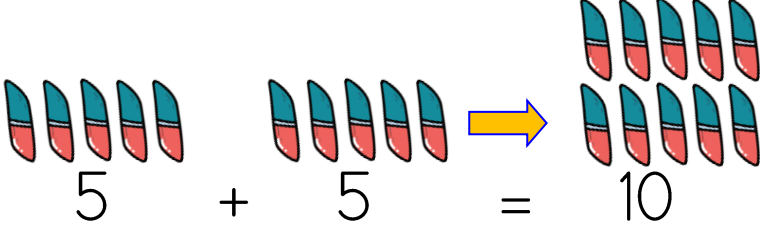
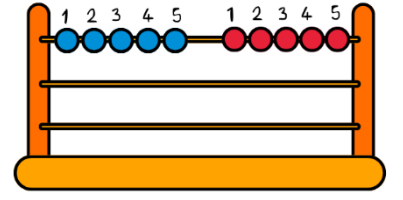




Varlıkların sayısını toplayarak bulalım.

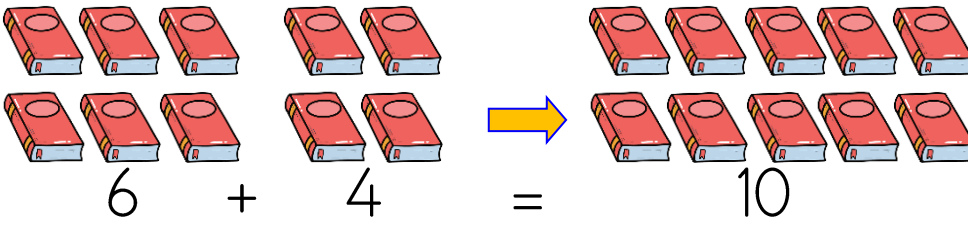


5, 5 daha 10 eder.

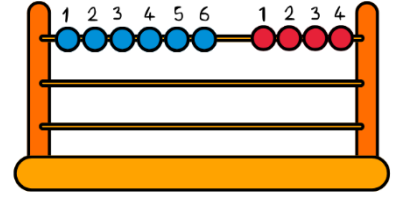


$$5 + 5 = 10$$

5 artı 5, eşittir 10

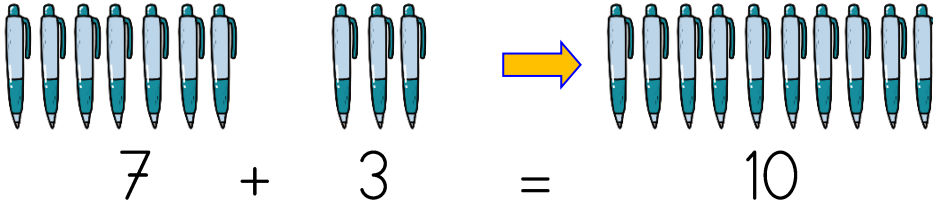


6, 4 daha 10 eder.

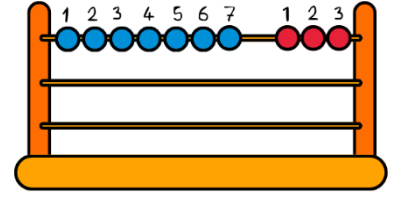


$$6 + 4 = 10$$

6 artı 4, eşittir 10

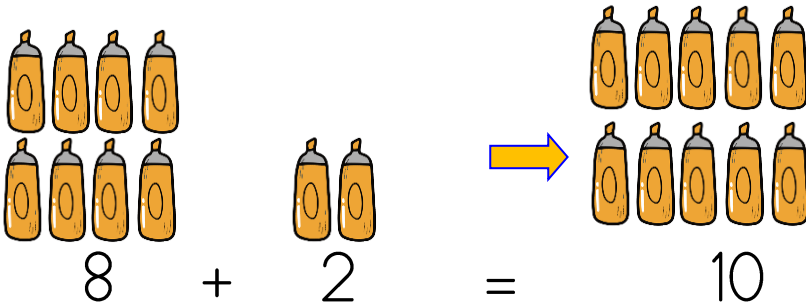


7, 3 daha 10 eder.

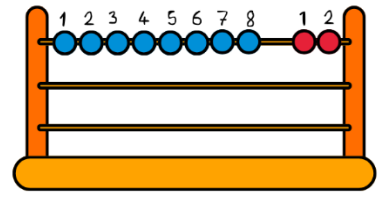


$$7 + 3 = 10$$

7 artı 3, eşittir 10



8, 2 daha 10 eder.



$$8 + 2 = 10$$

8 artı 2, eşittir 10

Aşağıdaki işlemleri yapalım. Aynı işlemi altına yazalım.

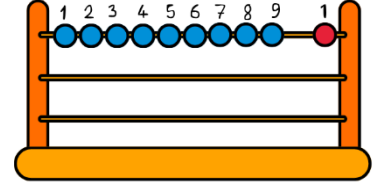
7 + 3 =10.....	6 + 4 =	8 + 2 =
7 + 3 = 10		



Varlıkların sayısını toplayarak bulalım.

$$9 + 1 = 10$$

9, 1 daha 10 eder.

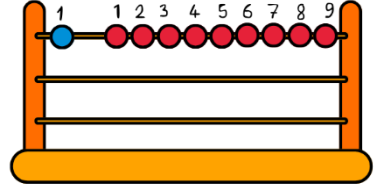


$$9 + 1 = 10$$

9 artı 1, eşittir 10

$$1 + 9 = 10$$

1, 9 daha 10 eder.

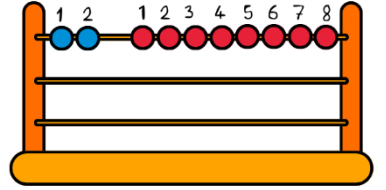


$$1 + 9 = 10$$

1 artı 9, eşittir 10

$$2 + 8 = 10$$

2, 8 daha 10 eder.

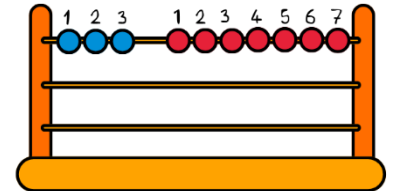


$$2 + 8 = 10$$

2 artı 8, eşittir 10

$$3 + 7 = 10$$

3, 7 daha 10 eder.



$$3 + 7 = 10$$

3 artı 7, eşittir 10

Aşağıdaki işlemleri yapalım. Aynı işlemi altına yazalım.

$$4 + 6 = \dots 10 \dots$$

$$2 + 8 = \dots$$

$$3 + 7 = \dots$$

$$4 + 6 = 10$$